

# 2 Times Table Activities

Count in 2s and colour in the grid:

1	2	3	4	5
6	7	8	9	10
11	12	13	14	15
16	17	18	19	20
21	22	23	24	25

Work out these answers:

a)  $1 \times 2 =$  \_\_\_\_\_

b)  $3 \times 2 =$  \_\_\_\_\_

c)  $5 \times 2 =$  \_\_\_\_\_

d)  $7 \times 2 =$  \_\_\_\_\_

e)  $9 \times 2 =$  \_\_\_\_\_

f)  $11 \times 2 =$  \_\_\_\_\_

g)  $2 \times 2 =$  \_\_\_\_\_

h)  $4 \times 2 =$  \_\_\_\_\_


i)  $6 \times 2 =$  \_\_\_\_\_


j)  $8 \times 2 =$  \_\_\_\_\_

k)  $10 \times 2 =$  \_\_\_\_\_


l)  $12 \times 2 =$  \_\_\_\_\_

How many ears are there?

a)  \_\_\_\_\_  $\times$  \_\_\_\_\_ = \_\_\_\_\_

b)  \_\_\_\_\_  $\times$  \_\_\_\_\_ = \_\_\_\_\_

c)  \_\_\_\_\_  $\times$  \_\_\_\_\_ = \_\_\_\_\_

d)  \_\_\_\_\_  $\times$  \_\_\_\_\_ = \_\_\_\_\_